

Date _____

20 minutes.

your agenda book.


on WS51 Making Colors.

with Sums through 18.

Day packets- Day 1 (tear out and attach to

your snow day packets upon the first day back
at the packet, you may contact me via the
school 304-227-4114 during the hours of

Learn About:




Colors



Making Colors

Did you know that all colors come from red, yellow or blue? They're the primary colors. Red and blue make purple. Blue and yellow make green. Yellow and red make orange. It is fun to mix paint to make new colors.



Circle.

Which three colors do you need to make all colors?
red green yellow blue pink

Write.

Red, yellow and blue are _____ colors.
orange primary

Match.

Red and blue make orange.
Blue and yellow make purple.
Yellow and red make green.

Color the picture: 1 - red 2 - yellow 3 - blue
4 - orange 5 - purple 6 - green

- Draw and color a picture using the primary colors.

Add.

1. $\begin{array}{r} 7 \\ + 5 \\ \hline \end{array}$

2. $\begin{array}{r} 5 \\ + 5 \\ \hline \end{array}$

3. $\begin{array}{r} 9 \\ + 9 \\ \hline \end{array}$

4. $\begin{array}{r} 6 \\ + 4 \\ \hline \end{array}$



5. $\begin{array}{r} 6 \\ + 7 \\ \hline \end{array}$

6. $\begin{array}{r} 6 \\ + 6 \\ \hline \end{array}$

7. $\begin{array}{r} 2 \\ + 8 \\ \hline \end{array}$

8. $\begin{array}{r} 9 \\ + 8 \\ \hline \end{array}$

9. $\begin{array}{r} 8 \\ + 7 \\ \hline \end{array}$

10. $\begin{array}{r} 9 \\ + 4 \\ \hline \end{array}$

11. $\begin{array}{r} 2 \\ + 9 \\ \hline \end{array}$

12. $\begin{array}{r} 8 \\ + 6 \\ \hline \end{array}$

13. $\begin{array}{r} 5 \\ + 9 \\ \hline \end{array}$

14. $\begin{array}{r} 7 \\ + 7 \\ \hline \end{array}$

15. $\begin{array}{r} 10 \\ + 8 \\ \hline \end{array}$

16. $\begin{array}{r} 8 \\ + 4 \\ \hline \end{array}$

17. $\begin{array}{r} 9 \\ + 7 \\ \hline \end{array}$

18. $\begin{array}{r} 7 \\ + 6 \\ \hline \end{array}$

19. $\begin{array}{r} 3 \\ + 6 \\ \hline \end{array}$

20. $\begin{array}{r} 7 \\ + 8 \\ \hline \end{array}$

Name _____ # _____

Date _____

2nd Grade: Snow Day Packet #2

- Read a book of your choice for 20 minutes.
- Study your spelling words from your agenda book.
- Complete Reading Comprehension- WS59 A Hobby.
- Complete Math WS 229 Subtracting from 14 or less.
- Do from the PE and Music Snow Day packets- Day 2 (tear out and attach to this packet of work)

Make sure to complete and return your snow day packets upon the first day back to school. If you have questions about the packet, you may contact me via the Remind app, LiveGrades, or phone the school 304-227-4114 during the hours of 10:00am-2:00pm on this snow day.

☺ Mrs. Kelly Teter

Learn About:

A Hobby

A hobby is something special that a person enjoys doing. Some people collect things as a hobby. They may collect stamps, coins or even comic books! Some people build things as a hobby. They may build furniture or model airplanes. Other hobbies are reading, sports and gardening. Do you have a hobby?



Underline.

A hobby is

something you need to build houses.
something special that a person likes to do.

Write.

Some people _____ things as a hobby.
cover collect

Circle.

What do some people collect?



stamps



ketchup



coins



comic books

Circle.

Some people

blue
build

things as a hobby.

Check.

They may build

- clouds.
- furniture.
- model airplanes.

• Write about your hobby.

Subtract.

subtracting from
14 or less

1.
$$\begin{array}{r} 7 \\ -4 \\ \hline \end{array}$$

2.
$$\begin{array}{r} 11 \\ -9 \\ \hline \end{array}$$

3.
$$\begin{array}{r} 8 \\ -5 \\ \hline \end{array}$$


4.
$$\begin{array}{r} 14 \\ -8 \\ \hline \end{array}$$

5.
$$\begin{array}{r} 9 \\ -4 \\ \hline \end{array}$$

6.
$$\begin{array}{r} 10 \\ -9 \\ \hline \end{array}$$

7.
$$\begin{array}{r} 12 \\ -7 \\ \hline \end{array}$$

8.
$$\begin{array}{r} 13 \\ -5 \\ \hline \end{array}$$



9.
$$\begin{array}{r} 13 \\ -9 \\ \hline \end{array}$$

10.
$$\begin{array}{r} 11 \\ -2 \\ \hline \end{array}$$

11.
$$\begin{array}{r} 13 \\ -8 \\ \hline \end{array}$$

12.
$$\begin{array}{r} 12 \\ -5 \\ \hline \end{array}$$

13.
$$\begin{array}{r} 10 \\ -1 \\ \hline \end{array}$$

14.
$$\begin{array}{r} 12 \\ -6 \\ \hline \end{array}$$

15.
$$\begin{array}{r} 11 \\ -8 \\ \hline \end{array}$$

16.
$$\begin{array}{r} 5 \\ -4 \\ \hline \end{array}$$

17.
$$\begin{array}{r} 11 \\ -6 \\ \hline \end{array}$$

18.
$$\begin{array}{r} 7 \\ -2 \\ \hline \end{array}$$

19.
$$\begin{array}{r} 9 \\ -3 \\ \hline \end{array}$$

20.
$$\begin{array}{r} 12 \\ -3 \\ \hline \end{array}$$

Date _____

Grade: Snow Day Packet #3

- Read a book of your choice for 20 minutes.
- Study your spelling words from your agenda book.
- Complete Reading Comprehension- WS67 Hiking.
- Complete Math WS20 Lesson 31 and 32.
- Do from the PE and Music Snow Day packets- Day 3 (tear out and attach to this packet of work)


Make sure to complete and return your snow day packets upon the first day back to school. If you have questions about the packet, you may contact me via the Remind app, LiveGrades, or phone the school 304-227-4114 during the hours of 10:00am-2:00pm on this snow day.

☺ Mrs. Kelly Teter

Learn About:

Hiking

Have you ever gone hiking in the woods? Many people go on long hiking trips. They like to be outdoors. Hikers wear backpacks to carry what they need. They carry food and water. Most hikers use a compass to help them find their way. A compass tells which way they are going.



Underline.

Who would enjoy hiking?

People who don't like the outdoors.

People who enjoy being outdoors.

Write.

Hikers wear _____ to carry what they need.
 umbrellas backpacks

Write.

What could you find in a hiker's backpack?

- water compass
 bike food

Color.

the hikers' backpacks - brown the hikers' compasses - red

- Draw a picture of you hiking in the woods.

Lesson 31

1. If 18 birds are resting in a tree and 7 birds are chirping, how many birds are not chirping?
 _____ birds are not chirping.


2. Circle the even number. 2 5 7

3. $18 - 11 =$

4. $15 + 12 =$

5. Look at the bar graph. How many students voted for cookies or fruit as their favorite snack?

_____ students voted for cookies or fruit as their favorite snack.



Lesson 32

1. Circle the odd number. 8 10 7

2. $14 - 10 =$

3. $14 + 10 =$

4. Look at the table. How many more pencils than red pens do second graders need to bring to school?

Second graders need to bring _____ more pencils than red pens.

Supply	Number Needed
Pencils	18
Red Pens	2
Notebooks	6
Journals	2
Crayons	2
Scissors	1
Glue	3

5. Pam spent 7 hours at the park on Saturday. On Sunday, she spent 8 hours at the park. How many hours did Pam spend at the park all weekend?

Pam spent _____ hours at the park all weekend.

Name _____ # _____

Date _____

2nd Grade: Snow Day Packet #4

- Read a book of your choice for 20 minutes.
- Study your spelling words from your agenda book.
- Complete Reading Comprehension- WS68 Skateboarding.
- Complete Math WS24 Lesson 39 and 40.
- Do from the PE and Music Snow Day packets- Day 4 (tear out and attach to this packet of work)

Make sure to complete and return your snow day packets upon the first day back to school. If you have questions about the packet, you may contact me via the Remind app, LiveGrades, or phone the school 304-227-4114 during the hours of 10:00am-2:00pm on this snow day.


© Mrs. Kelly Teter

Name _____

Learn About:

Skateboarding

Many kids like to ride skateboards. Skateboards are short boards on wheels. Some cities have special places to ride skateboards. They are called skateboard parks. The parks have rules to keep kids safe. Kids must wear helmets on their heads. They must also wear kneepads and gloves.



Circle.

Yes or No

- | | | |
|---|-----|----|
| Many kids like to ride skateboards. | Yes | No |
| Skateboards are used to build houses. | Yes | No |
| Skateboards are short boards on wheels. | Yes | No |
| Some cities have skateboard parks. | Yes | No |

Write.

Skateboard parks have _____ to keep kids safe.
jobs rules

- gloves
- helmets
- kneepads

RULES

- Kids must wear _____.
- Kids must wear _____ and _____.

Color.


skateboards - red helmets - blue

- Draw and color a green skateboard.

Lesson 39

- $74 + 23 =$
- $46 - 15 =$
- Circle the odd number.
28 6 19 4
- Write the number eighty-eight.

- Maggie picks 28 flowers. Jenny picks 16 flowers.
How many more flowers does Maggie pick than Jenny?





Maggie picks _____ more flowers.

Lesson 40

- $17 - 6 =$
- $17 + 3 =$
- Look at the tally chart. Which color was the most popular?
_____ was the most popular color.
- Write the number fifty-three.

- Look at the Base Ten Blocks.
Write the number shown.



Name _____ # _____ Date _____

2nd Grade: Snow Day Packet #5

- Read a book of your choice for 20 minutes.
- Study your spelling words from your agenda book.
- Complete Reading Comprehension- WS73 A Rodeo.
- Complete Math WS32 Lesson 55 and 56.
- Do from the PE and Music Snow Day packets- Day 5 (tear out and attach to this packet of work)

Make sure to complete and return your snow day packets upon the first day back to school. If you have questions about the packet, you may contact me via the Remind app, LiveGrades, or phone the school 304-227-4114 during the hours of 10:00am-2:00pm on this snow day.


☺ Mrs. Kelly Teter

Name _____

Learn About:

A Rodeo

Have you ever been to a rodeo? A rodeo has many different events. Cowboys and cowgirls perform for a crowd. They ride bucking horses and bulls. They have calf-roping contests. They ride bareback on horses. Prizes are given for the best person in each event. Some cowboys and cowgirls become famous in the rodeo.




Unscramble.

A _____ has many different events.
d o r o e
3 2 1 5 4

Circle.

Who performs in a rodeo? cowboy doctor cowgirl

Check.



- We ride bucking horses and bulls.
- We rope calves.
- We rope fancy cars.
- We ride bareback on horses.

Circle.

Puzzles

Prizes

are given to the best person in each event.

- Draw a sign that tells all about the rodeo.

Lesson 55

- Mr. and Ms. Russell have 9 grandchildren. If 7 of their grandchildren have red hair and the rest of their grandchildren have brown hair, how many of their grandchildren have brown hair?
_____ of their grandchildren have brown hair.
- Round the number to the nearest tens place. 44 _____
- Fill in the blank with $>$, $<$, or $=$ to make the number sentence true.
22 _____ 22
- $18 + 5 =$
- $98 - 42 =$

Lesson 56

- Round the number to the nearest tens place. 77 _____
- $38 - 16 =$
- Ann buys 10 bubble wands to give away as birthday presents. She gives away 7 bubble wands during the school year. How many bubble wands does Ann have left?
Ann has _____ bubble wands left.
- Use centimeters to measure the height of the glue bottle.
The glue bottle is _____ centimeters high.
- $13 + 9 =$

